


Name: _____


Date: _____

SUBTRACTION

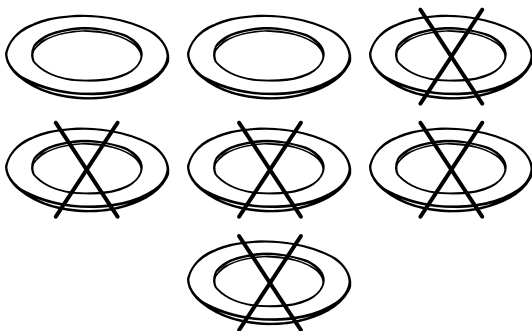
Directions: Fill in the number sentence.




$$\underline{\quad} - \underline{\quad} = \underline{\quad}$$



$$\underline{\quad} - \underline{\quad} = \underline{\quad}$$



$$\underline{\quad} - \underline{\quad} = \underline{\quad}$$



$$\underline{\quad} - \underline{\quad} = \underline{\quad}$$

Name: _____

Date: _____

GRAPHING

Directions: Count the shaded boxes for each item and write the number.

10						
9						
8						
7						
6						
5						
4						
3						
2						
1						
	