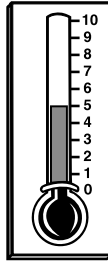


Name: _____

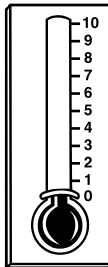
Date: _____

MEASUREMENT

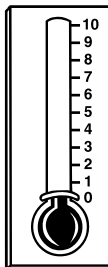
Directions: Shade in each thermometer to match the number of degrees.



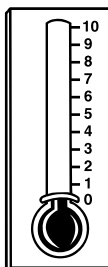
5 degrees



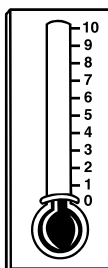
3 degrees



6 degrees



8 degrees



2 degrees