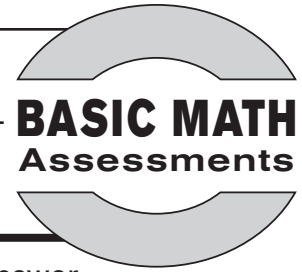


Name:

Date:


Pre Assessment A



Use before completing pages 4–9 of *Basic Math Practice: Rounding, Reasonableness, and Estimation*.

Directions: Read each problem. Fill in the circle for the correct answer.

1) What is the number for the picture?



- 236
- 156
- 145
- 247

2) What is the number for the picture?

Hundreds	Tens	Ones
1	5	8

- 851
- 158
- 255
- 530

3) Which digit is in the ones place?

5,798

- 8
- 7
- 9
- 5

4) Which digit is in the tens place?

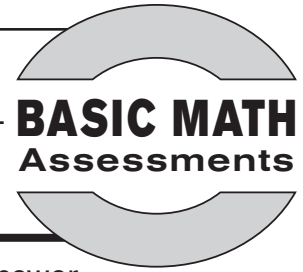
4,362

- 4
- 2
- 6
- 3

Name:

Date:

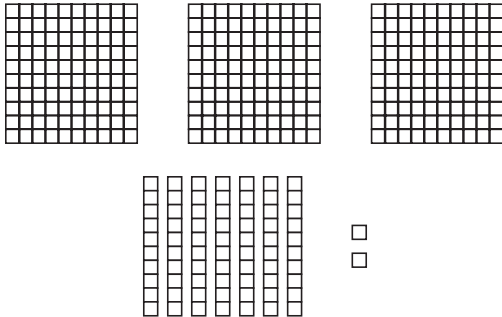
Pre Assessment B



Use before completing pages 4–9 of *Basic Math Practice: Rounding, Reasonableness, and Estimation*.

Directions: Read each problem. Fill in the circle for the correct answer.

1) What is the number for the picture?



- 351
- 372
- 273
- 227

2) What is the number for the picture?

Hundreds	Tens	Ones
6	4	1

- 641
- 257
- 416
- 146

3) Which digit is in the ones place?

3,149

- 3
- 4
- 1
- 9

4) Which digit is in the tens place?

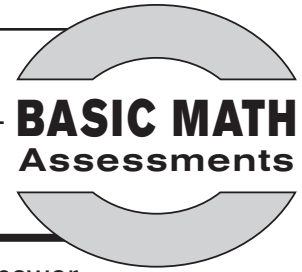
9,750

- 5
- 7
- 9
- 0

Name:

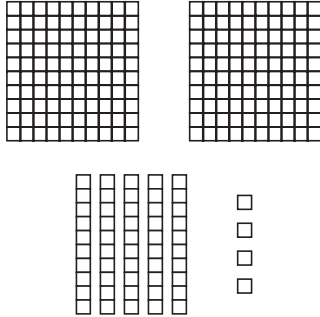
Date:

Check Up



Directions: Read each problem. Fill in the circle for the correct answer.

1) What is the number for the picture?



- 164
- 254
- 453
- 363

2) Round 72 to the tens place.

- 7
- 2
- 70
- 80

3) Round 59 to the tens place.

- 60
- 9
- 50
- 5

4) Round 438 to the tens place.

- 300
- 430
- 400
- 440