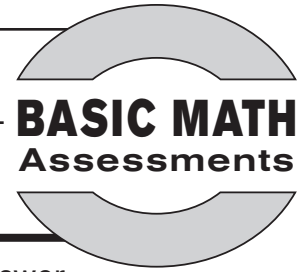


Name:

Date:

Pre Assessment A



Use before completing pages 6–10 of *Basic Math Practice: Measurement*.

Directions: Read each problem. Fill in the circle for the correct answer.

1) How long is the line?



- 4 paperclips
- 2 paperclips
- 5 paperclips
- 7 paperclips

2) How long is the line?



- 3 paperclips
- 5 paperclips
- 4 paperclips
- 6 paperclips

3) How long is the line?



- 2 paperclips
- 4 paperclips
- 3 paperclips
- 5 paperclips

4) How long is the line?

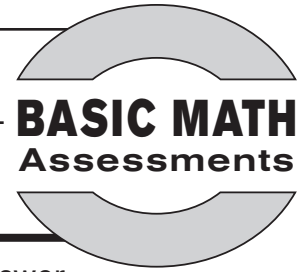


- 4 paperclips
- 5 paperclips
- 7 paperclips
- 6 paperclips

Name:

Date:

Pre Assessment B



Use before completing pages 6–10 of *Basic Math Practice: Measurement*.

Directions: Read each problem. Fill in the circle for the correct answer.

1) How long is line B?

Line A



Line B



Line C



Line D



- 4 paperclips
- 1 paperclip
- 6 paperclips
- 8 paperclips

2) How long is line D?

Line A



Line B



Line C



Line D



- 1 paperclip
- 2 paperclips
- 4 paperclips
- 3 paperclips

3) Which line is 4 paperclips long?

Line A



Line B



Line C



Line D



- Line A
- Line C
- Line B
- Line D

4) Which line is 2 paperclips long?

Line A



Line B



Line C



Line D



- Line D
- Line B
- Line C
- Line A

Name:

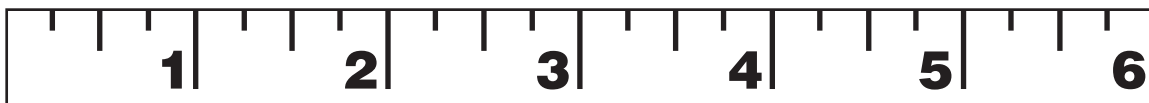
Date:

Check Up, *continued*

BASIC MATH
Assessments

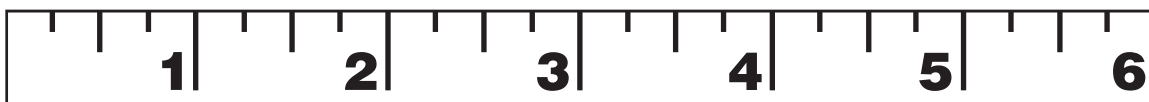
Directions: Read each problem. Fill in the circle for the correct answer.

5) How long is the line below?



- $1\frac{1}{4}$ inches
- $1\frac{1}{2}$ inches
- $1\frac{3}{4}$ inches
- 1 inch

6) How long is the line below?



- 4 inches
- $4\frac{1}{2}$ inches
- $4\frac{3}{4}$ inches
- $4\frac{1}{4}$ inches