

Name: _____

Date: _____

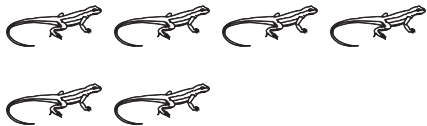
Pre Assessment A

BASIC MATH
Assessments

Use before completing pages 10–19 of *Basic Math Practice: Number Concepts*.

Directions: Read each problem. Fill in the circle for the correct answer.

1) How many  ?



- 5
- 4
- 3
- 6

2) How many  ?




- 9
- 8
- 7
- 10

3) Which group shows 5 items?




4) Which group shows 3 items?



Name: _____


Date: _____

Pre Assessment B




Use before completing pages 10–19 of *Basic Math Practice: Number Concepts*.


Directions: Read each problem. Fill in the circle for the correct answer.

1) How many ?




- 5
- 7
- 6
- 8

2) How many ?




- 10
- 8
- 9
- 7

3) Which group shows eight items?



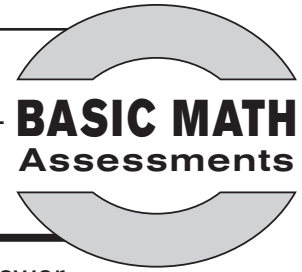
4) Which group shows four items?




Name:

Date:

Check Up




Directions: Read each problem. Fill in the circle for the correct answer.

1) How many ?







- 8
- 7
- 6
- 9

2) How many ?






- 3
- 5
- 4
- 6

3) Which group shows seven items?

- 
- 
- 
- 

4) Which group shows ten items?

- 
- 
- 
- 