

Name:

Date:

Rounding

IDENTIFYING TENS
AND HUNDREDS

Directions: Look at each number. Underline the digit in the hundreds place.
Then, circle the digit in the tens place.

1

167

2

569

3

380

4

743

5

2,056

6

1,477

7

8,681

8

3,509

Name: _____

Date: _____

Rounding

TEN CENT
ROUNDING

Directions: Use the number line to round each item's price up to the next ten cents.




1



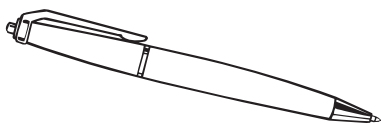
\$0.26 rounds up to \$_____.

2



\$0.55 rounds up to \$_____.

3



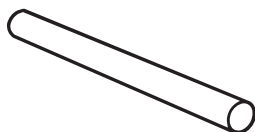
\$0.87 rounds up to \$_____.

4

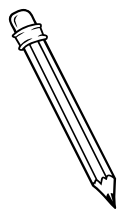


\$0.74 rounds up to \$_____.

5



\$0.13 rounds up to \$_____.



Why would you pay \$0.40 instead of \$0.30 for something that costs \$0.32?

Name:

Date:

Reasonableness

REASONABLE
SUMS

Directions: Circle the most reasonable sum for each addition problem. Then, answer the questions.

1

$$\begin{array}{r} 68 \\ + 34 \\ \hline \end{array}$$

70

100

160

Why is the number you circled the most reasonable answer?

Why are the other numbers unreasonable answers?

2

$$\begin{array}{r} 15 \\ + 39 \\ \hline \end{array}$$

10

30

60

Why is the number you circled the most reasonable answer?

Why are the other numbers unreasonable answers?

Name:

Date:

Reasonableness

TWO-STEP
REASONABLE RANGES

Directions: Read each word problem. Then, circle the most reasonable answer.

1

Grace practices the piano 3 to 5 times a week for 1 hour, plus 3 hours each weekend. What is a reasonable range for the total number of hours she practices each week?

less than 3 hours

between 3 and 5 hours

between 6 and 8 hours

more than 10 hours

2

Byron exercises for 1 hour in the morning 2 to 3 times a week, plus 1 hour in the evening 2 to 4 times a week. What is a reasonable range for the total number of hours he exercises each week?

less than 2 hours

between 4 and 7 hours

between 2 and 3 hours

more than 12 hours

3

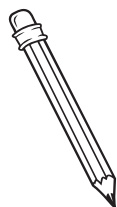
Bryce walks his dog for 1 hour in the morning 5 to 6 times a week. What is a reasonable range for the total number of hours he walks his dog in 2 weeks?

less than 5 hours

between 5 and 6 hours

between 10 and 12 hours

more than 18 hours



How did you find the most reasonable range for each problem?

Name: _____

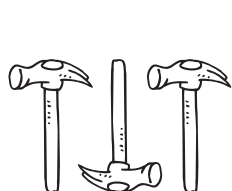
Date: _____

Estimation

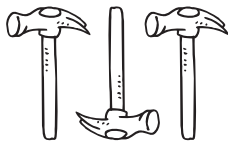
ESTIMATING
AMOUNTS

Directions: Look at each row of items. Then, circle the estimated number of items.

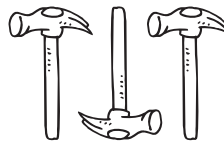
1



about 10 hammers



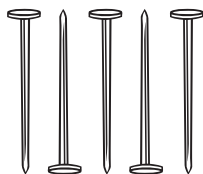
about 20 hammers



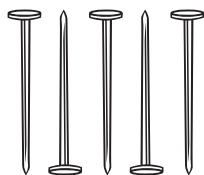
about 30 hammers



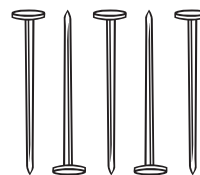
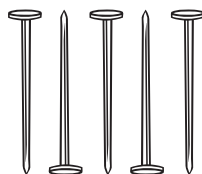
2



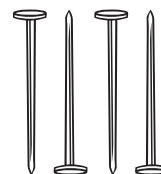
about 5 nails



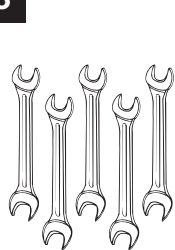
about 15 nails



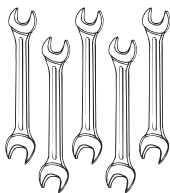
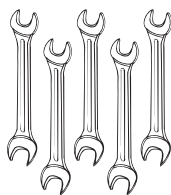
about 25 nails



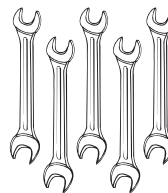
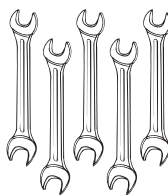
3



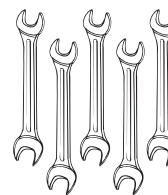
about 30 wrenches



about 40 wrenches



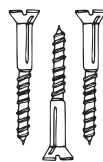
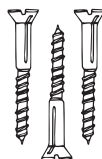
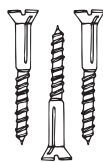
about 50 wrenches



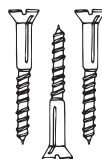
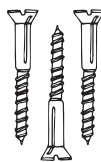
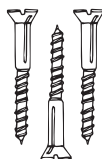
4



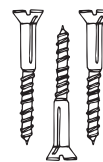
about 20 screws



about 30 screws



about 40 screws



Name:

Date:

Estimation

*FINDING THE AMOUNT
STILL OWED*

Directions: Read each word problem. Then, circle the best estimate.

1

Lily's soccer team needs to raise \$490.00 to buy a new goal post. Her team sells bags of popcorn to raise money. The team has sold \$187.00 worth of popcorn. About how much more money does Lily's team still need to raise?

\$200.00

\$300.00

\$600.00

2

A plumbing pipe in the Bensons' house breaks, and water leaks all over the bathroom floor. It will cost \$672.00 to repair the pipe. The insurance company will pay \$500.00 toward the cost. About how much will the Bensons have to pay for the repairs?

\$100.00

\$200.00

\$500.00

3

Vince wrecks his car. The repairs cost \$245.00. He writes a check for \$100.00 and charges the rest to his credit card. About how much does Vince put on his credit card?

\$350.00

\$250.00

\$150.00

4

Terry owes \$580.00 for her new couch. She makes a payment of \$300.00. About how much more does Terry owe?

\$200.00

\$300.00

\$450.00