







Directions: Write the correct time below each clock.

Example:



6:45



Directions: Complete the following series.

Example: Jan. 6, Feb. 7, Mar. 8, Apr. 9, May 10, June 11, July 12, August 13

1. 30A, 35C, 40E, _____

2. Spell backwards every other letter:
COMPUTER SCIENCES S, C, E,

3. 1A, 3B, 5C, _____

4. Spell backwards: PINECONE E, N, O

5. May 11, June 12, July 13,

6. Spell backwards every other letter:
HIGH SATISFACTION N, I, C,

7. 11A, 10B, 9C, _____

8. Dec. 15, Jan. 14, Feb. 13,

9. Spell backwards: TUNAFISH H, S, I,

10. 20S, 19T, 18U, _____